



數學智能之第十六屆全港數學盃挑戰賽

The 16th Hong Kong Mathematics Cup Challenge

小學 P2 組試題樣本

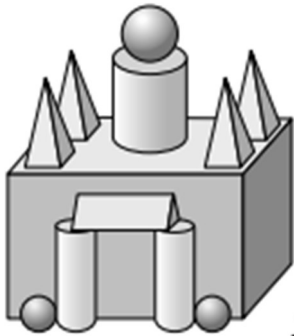
1. 下列哪一道數式的結果最小？

Which of the following calculation has the smallest result?

- A. $7 + 8$ B. $9 + 5$ C. $11 + 5$ D. $18 - 3$

2. 下圖中，球體比錐體少多少個？

In the picture below, how many spheres are fewer than the pyramids?



- A. 4 B. 3 C. 2 D. 1

3. 根據規律，橫線上的數字是多少？

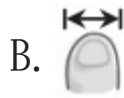
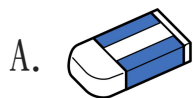
What is the missing number?

26 , 22 , _____ , 14 , 10

- A. 18 B. 19 C. 17 D. 16

4. 下列哪種工具最適合用來量度浴缸的長度？

Which of the following tools is most suitable to measure the length of a bathtub?





香港多元智能教育協會
Hong Kong Multiple Intelligences
Education Association

數學智能之第十六屆全港數學盃挑戰賽
The 16th Hong Kong Mathematics Cup Challenge
小學 P2 組試題樣本答案

1. B

2. D

3. A

4. C