



數學智能之第十六屆全港數學盃挑戰賽

The 16th Hong Kong Mathematics Cup Challenge

小學 P1 組試題樣本

1. 49 是由多少個 7 組成？

How many number 7 can form a number 49?

- A. 4 B. 5 C. 6 D. 7

2. 以下硬幣共有多少元？

How much money is there?



- A. 5 B. 7 C. 8 D. 9

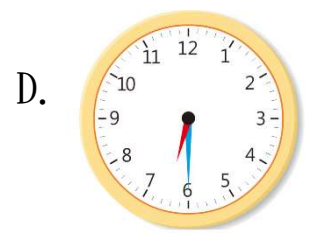
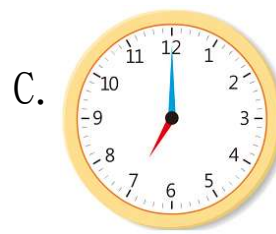
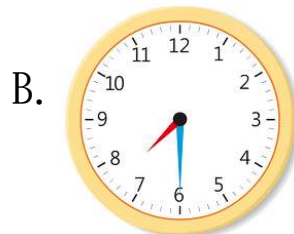
3. 小明有4枝鉛筆，小美有5枝鉛筆，小花有8枝鉛筆，他們共有多少枝鉛筆？

Siu Ming has 4 pencils, Siu Mei has 5 pencils and Siu Fa has 8 pencils. How many pencils do they have?

- A. 17 B. 18 C. 16 D. 15

4. 以下哪一個時鐘的時間是7時半？

Which of the following clocks is in half past seven?





香港多元智能教育協會
Hong Kong Multiple Intelligences
Education Association

數學智能之第十六屆全港數學盃挑戰賽
The 16th Hong Kong Mathematics Cup Challenge
小學 P1 組試題樣本答案

1. D

2. B

3. A

4. B