



數學智能之第十六屆全港數學盃挑戰賽

The 16th Hong Kong Mathematics Cup Challenge

幼稚園 K3 組試題樣本

1. 把 6, 8, 4 由小至大排次序。

Arrange 6, 8, 4 from smallest to largest.

- A. 6, 8, 4 B. 4, 6, 8 C. 6, 4, 8 D. 8, 6, 4

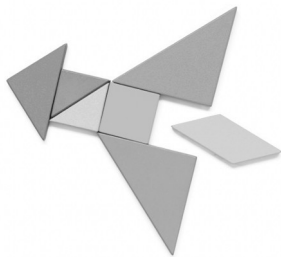
2. 數字1至20之間，最大的單數是？

Between numbers 1 to 20, what is the largest odd number?

- A. 20 B. 17 C. 18 D. 19

3. 下圖有多少個三角形？

How many triangles are there in the picture below?







- A. 7 B. 6 C. 5 D. 4

4. 以下哪一項物件最重？

Which of the following items is the heaviest?



- A.  B.  C.  D. 



香港多元智能教育協會
Hong Kong Multiple Intelligences
Education Association

數學智能之第十六屆全港數學盃挑戰賽
The 16th Hong Kong Mathematics Cup Challenge
幼稚園 K3 組試題樣本答案

1. B

2. D

3. C

4. A