



數學智能之第十三屆全港數學盃挑戰賽

The 13th Hong Kong Mathematics Cup Challenge

小學 P3 組試題樣本

1. 一隻雞蛋約重___克。

An egg weighs about ___ g.

- A. 6 B. 60 C. 600 D. 6000

2. 下面的()內加上什麼運算符號使算式成立？


What arithmetic symbols should be added to the following () to make the formula hold?

$$2547 () 1212 () 2987 = 772$$

- A. + , - B. + , + C. - , + D. - , -

3. 哥哥買了這些蘋果的三分之一，即買了多少個？

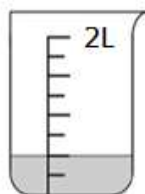
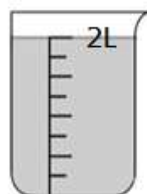
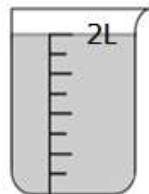
My brother bought one-third of these apples, that is, how many did he buy?



- A. 3 B. 4 C. 6 D. 9

4. 量杯內共有湯汁_____毫升。

There is a total of _____ milliliters of soup in the measuring cup.



- A. 4200 B. 250 C. 4500 D. 4400



香港多元智能教育協會
Hong Kong Multiple Intelligences
Education Association

數學智能之第十三屆全港數學盃挑戰賽
The 13th Hong Kong Mathematics Cup Challenge
小學 P3 組試題樣本答案

1. B

2. A

3. A

4. C