



數學智能之第十三屆全港數學盃挑戰賽

The 13th Hong Kong Mathematics Cup Challenge

小學 P1 組試題樣本

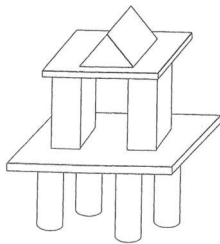
1. 蛋糕有18件，吃去半打後，還餘蛋糕多少件？

There are 18 pieces of cake. How many pieces of cake are left after eating half a dozen?

A. 9 B. 10 C. 11 D. 12

2. 下圖中共可找到多少個四角柱體？


How many rectangular prisms can be found in the following picture?





A. 7 B. 1 C. 4 D. 9

3. 下圖中哪一隻動物最重？

Which animal is the heaviest in the picture below?



A.  B.  C.  D. 

4. 1000是由多少個50組成？

By adding how many numbers of 50 can form the number 1000?

A. 10 B. 15 C. 20 D. 30



香港多元智能教育協會
Hong Kong Multiple Intelligences
Education Association

數學智能之第十三屆全港數學盃挑戰賽
The 13th Hong Kong Mathematics Cup Challenge
小學 P1 組試題樣本答案

1. D

2. C

3. C

4. C