




數學智能之第十二屆全港數學盃挑戰賽  
The 12<sup>th</sup> Hong Kong Mathematics Cup Challenge  
幼稚園 K2 組試題樣本

1. 下圖共有多少個水果？


How many fruits are there in the picture below?



- A. 12      B. 13      C. 14      D. 15

2. 以下欠缺的數字是？

What is the missing number?



- A. 12      B. 9      C. 13      D. 15

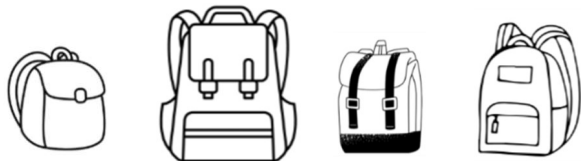
3. 以下哪個是圓形？

Which of the following is a circle?



4. 下圖哪個書包最大？

Which school bag is the biggest?



- A.       B.       C.       D. 



香港多元智能教育協會  
Hong Kong Multiple Intelligences  
Education Association

數學智能之第十二屆全港數學盃挑戰賽  
The 12<sup>th</sup> Hong Kong Mathematics Cup Challenge  
幼稚園 K2 組試題樣本答案

1. C

2. A

3. B

4. B