



數學智能之第十屆全港數學盃挑戰賽 小學 P4 組試題樣本

1. 下面哪個算式的答案是最小？

Which of the following has the least value of answer?

- A. $999 + (148 + 40)$ B. $999 + 148 + 40$
C. $999 + (148 - 40)$ D. $999 - (148 + 40)$

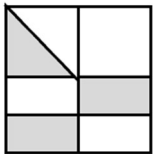
2. 小明有105元，一粒糖果售價9元，他還欠多少元才能買12粒糖果？

Siu Ming has \$105. A candy is sold at \$9. How much additional money is needed to buy 12 candies?

- A. 3 B. 5 C. 8 D. 10

3. 下圖中，灰色部分佔全圖的幾分之幾？

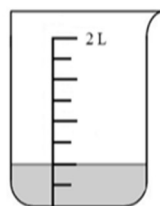
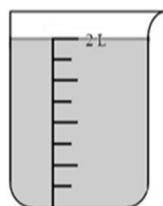
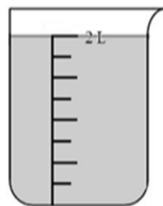
In the figure below, what percentage of the whole picture is the gray part?



- A. $\frac{1}{4}$ B. $\frac{1}{2}$ C. $\frac{3}{7}$ D. $\frac{3}{8}$

4. 量杯內共有湯汁_____毫升。

There is a total of _____ milliliters of soup in the measuring cup.



- A. 4200 B. 250 C. 4500 D. 4400



數學智能之第十屆全港數學盃挑戰賽 小學 P4 組試題樣本答案

1. D

2. A

3. D

4. C